



**INDIAN SCHOOL SOHAR**  
**PERIODIC TEST- I (2023-24)**  
**SUBJECT –EVS**  
**CLASS – III**  
**SET –A**

**Date of Exam: 21 /05/2023**  
**Time Allotted: 40 Minutes**

**Max. Marks: 20**

(Note: This question paper consists of 4 printed pages. Please check that you have all the pages.)

Name: \_\_\_\_\_

Roll No: \_\_\_\_\_

Section: \_\_\_\_\_

GR No: \_\_\_\_\_

Subject Teacher's Sign with date

Invigilator's sign with date

**Q1. Choose and write the correct option in the given space:**

**(1×5=5)**

i. Plants breathe through their \_\_\_\_\_

A) Gills

C) Buds

B) Stomata

D) Flower

**1. Answer: \_\_\_\_\_**

ii. Look at the picture and select the correct feature of living things as shown.



A) Living things can grow

C) Living things can reproduce

B) Living things can move

D) Living things can feel

**2. Answer: \_\_\_\_\_**

iii. Complete the following.

Radish: Root: Ginger: \_\_\_\_\_

A) Leaf

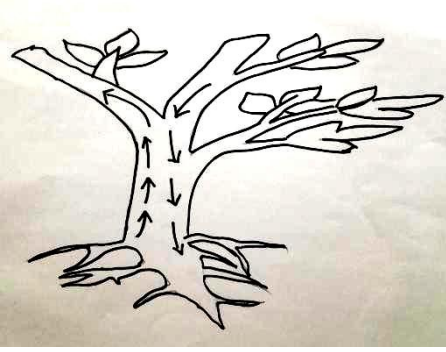
C) Stem

B) Branch

D) Fruit

**3. Answer: \_\_\_\_\_**

iv. In the picture given below, up arrow ( ↑ ) represents



4. Answer: \_\_\_\_\_

- A) Movement of food
- B) Movement of water only
- C) Movement of water and minerals
- D) Movement of minerals only

v. Leaves of 'Touch-me-not' plant curl up and close on being touched. This shows

- A) It can sense touch
- B) It can breathe
- C) It can reproduce
- D) It can grow

5. Answer: \_\_\_\_\_

**Q2. There are two statements marked as Assertion(A) and Reason (R).Choose**

**the correct answer as per the options provided below:**

**(1×2=2)**

- A. Both Assertion (A) and Reason (R) are true and Reason (R) is a correct explanation of Assertion (A).
- B. Both Assertion (A) and Reason (R) are true but Reason (R) is not a correct explanation of Assertion (A).
- C. Assertion (A) is true and Reason (R) is false.
- D. Assertion (A) is false and Reason (R) is true.

i. **Assertion(A):** A rose plant grows from stem cutting.

**Reason(R):**Not all new plants grow from seeds.

**Ans:** \_\_\_\_\_

ii. **Assertion(A):**A train cannot move on its own but a cat can.

**Reason(R):**Non-living things can move while living things cannot.

**Ans:** \_\_\_\_\_

**Q3. Give reason:-**

**(1×2=2)**

i. Plants do not need to move from one place to another.

---

---

ii. The flower is an important part of a plant.

---

---

**Q4. Differentiate between Tap root and Fibrous root.**

**(2×1=2)**

S No	Tap root	Fibrous root

**Q5. Give two examples:-**

**( 1 ×3=3)**

i. Leaves that store food

a) \_\_\_\_\_ b) \_\_\_\_\_

ii. Plants which reproduce with the help of stem

a) \_\_\_\_\_ b) \_\_\_\_\_

iii. Fruits having many seeds

a) \_\_\_\_\_ b) \_\_\_\_\_

**Q6. Draw and label the parts of a leaf .**


**(3×1=3)**



**Q7. Read the passage and answer the questions that follow.**

**(1×3=3)**

On a sunny day Anu and her brother Ayaan went to a park with their parents. Anu observed many types of plants in the park. She noticed that most of them are green in color and they cannot move from one place to another. Ayaan, while playing in the sand found some seeds with baby plants. Anu and Ayaan got curious to know more about plants, so they asked their parents about the plants.



A) Why do most of the plants are green in color ?

---

---

B) How do the plants get food even though they are fixed to a place?

---

---

C) How does a baby plant grow from a seed?

---

---

\*\*\*\*\*



INDIAN SCHOOL SOHAR  
PERIODIC TEST- I (2023-24)  
SUBJECT –EVS  
CLASS – III  
SET –B

Date of Exam: 21 /05/2023

Time Allotted: 40 Minutes

Max. Marks: 20

(Note: This question paper consists of 4 printed pages. Please check that you have all the pages.)

Name: \_\_\_\_\_

Roll No: \_\_\_\_\_

Section: \_\_\_\_\_

GR No: \_\_\_\_\_

Subject Teacher's Sign with date

Invigilator's sign with date


Q1. Choose and write the correct option in the given space:

(1×5=5)


i. Which of the following living things can give birth to their young ones?



A)



C)



B)



D)

1. Answer: \_\_\_\_\_

ii. Complete the following.

Turnip: Root: Potato: \_\_\_\_\_

A) Leaf

C) Stem

B) Branch

D) Fruit

2. Answer: \_\_\_\_\_

iii. Which of the following is not required for green plants to make food?

A) Carbon-di-oxide

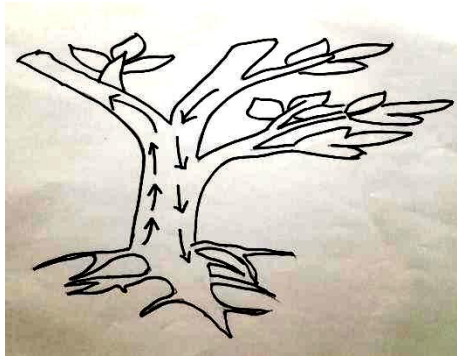
C) Sunlight

B) Oxygen

D) Water

3. Answer: \_\_\_\_\_

iv. In the picture given below, down arrow ( ↓ ) represents



4. Answer: \_\_\_\_\_

- A) Movement of food
- B) Movement of water only
- C) Movement of water and minerals
- D) Movement of minerals only

v. Grasshoppers breathe through

5. Answer: \_\_\_\_\_

- A) Gills
- B) Stomata
- C) Nose
- D) Air holes

**Q2. There are two statements marked as Assertion (A) and Reason(R). Choose the correct answer as per the options provided below:-** (1×2=2)

- A. Both Assertion (A) and Reason (R) are true and Reason (R) is the correct explanation of Assertion (A).
- B. Both Assertion (A) and Reason (R) are true but Reason (R) is not the correct explanation of Assertion (A).
- C. Assertion (A) is true and Reason (R) is false.
- D. Assertion (A) is false and Reason (R) is true.

i. **Assertion(A):** A rose plant grows from stem cutting.

**Reason(R):**Not all new plants grow from seeds.

**Ans:** \_\_\_\_\_

ii. **Assertion(A):**A train cannot move on its own but a cat can.

**Reason(R):**Non-living things can move while living things cannot.

**Ans:** \_\_\_\_\_

**Q3. Give reason:-** (1×2=2)

i. Plants do not need to move from one place to another. Why?

\_\_\_\_\_

\_\_\_\_\_

ii. The flower is an important part of a plant.

---

---

**Q4. Differentiate between Tap root and Fibrous root.**

**(2×1=2)**

<b>S.No</b>	<b>Tap root</b>	<b>Fibrous root</b>

**Q5. Give two examples:-**

**(1 ×3=3)**

i. Leaves that store food

a) \_\_\_\_\_ b) \_\_\_\_\_

ii. Plants which reproduce with the help of stem

a) \_\_\_\_\_ b) \_\_\_\_\_

iii. Fruits having many seeds.

a) \_\_\_\_\_ b) \_\_\_\_\_

**Q6. Draw and label the parts of a leaf.**

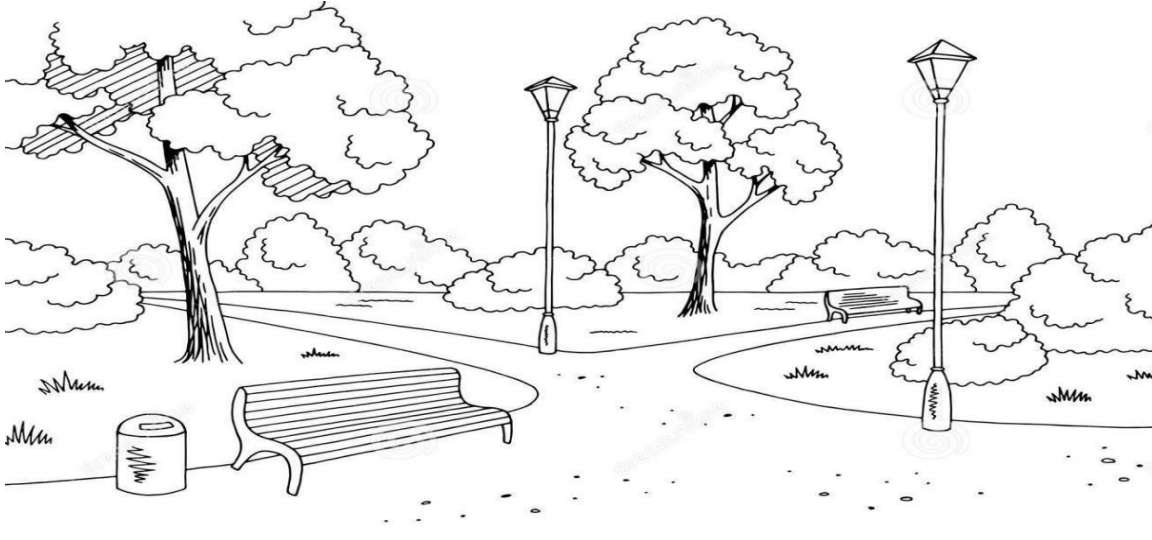
**(3×1=3)**



**Q7. Read the passage and answer the questions that follow.**

**(3×1=3)**

On a sunny day Anu and her brother Ayaan went to a park with their parents. Anu observed many types of plants in the park. She noticed that most of them are green in color and they cannot move from one place to another. Ayaan, while playing in the sand found some seeds with baby plants. Anu and Ayaan got curious to know more about plants, so they asked their parents about the plants.



A) Why do most of the plants are green in color ?

---

---

B) How do the plants get food even though they are fixed to a place?

---

---

B) How does a baby plant grow from a seed?

---

---

\*\*\*\*\*